



# Theo Thinks

I can find gaps in addition sentences.



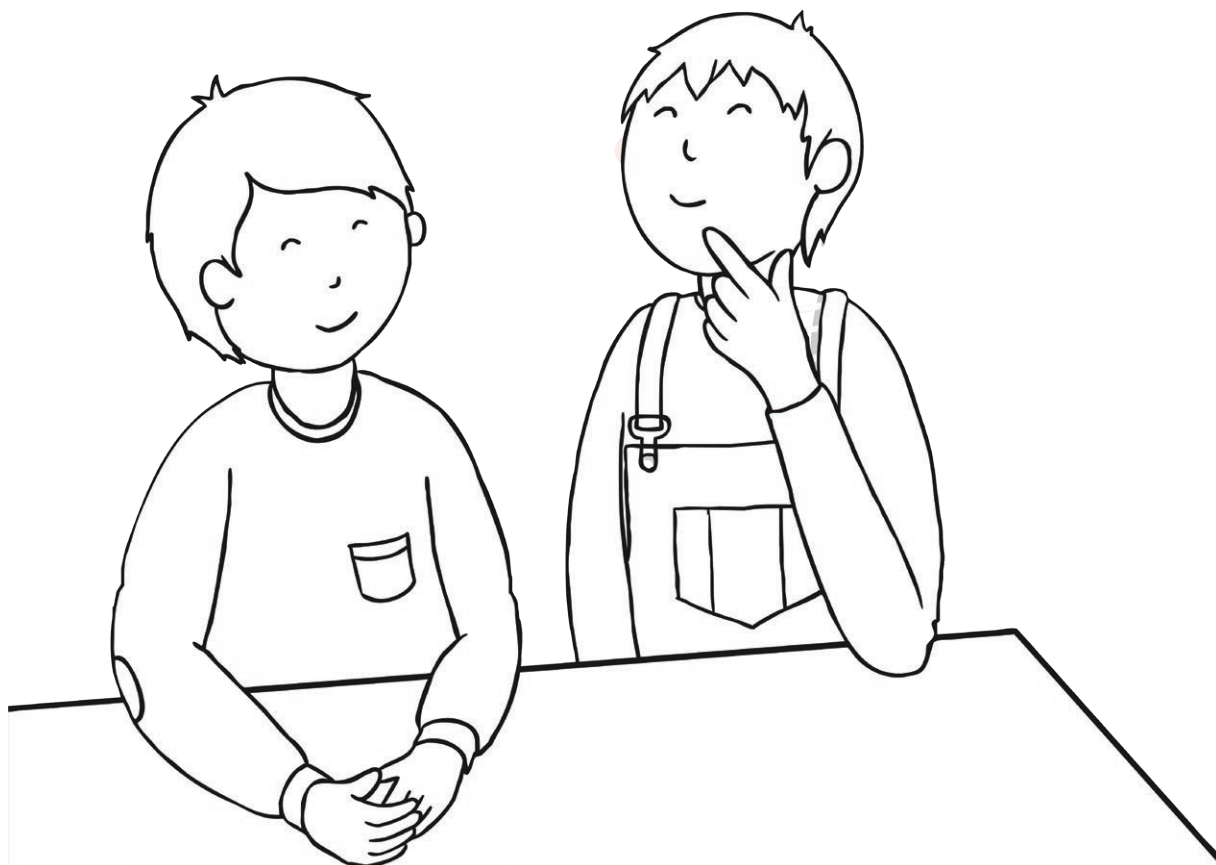
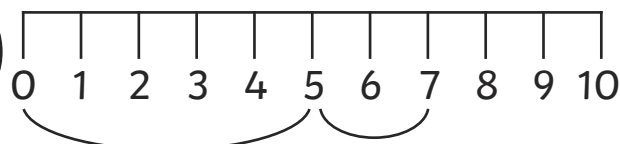
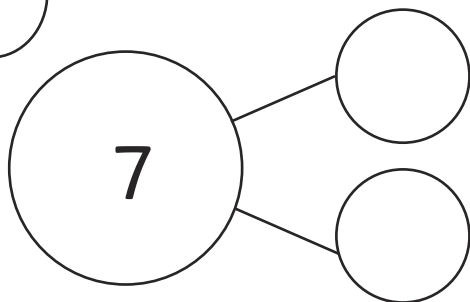
Complete the jigsaws, filling in any missing information. Use counters to help you.



$$+ 5 = 7$$

Ben had some stamps. Gran gave him 5 more and now he has 7.  
How many did he start with?

\_\_\_\_\_



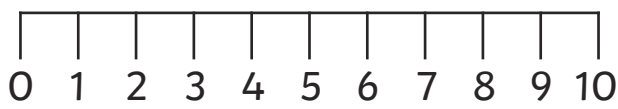
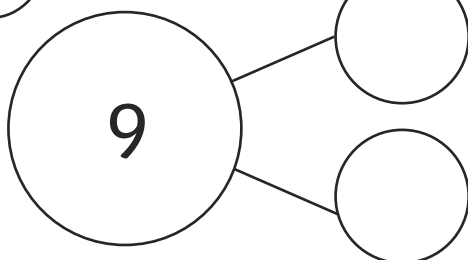


# Theo Thinks

$$6 + \square = 9$$

Alfie had £6. He saved some more and now has £9. How much extra has he saved?

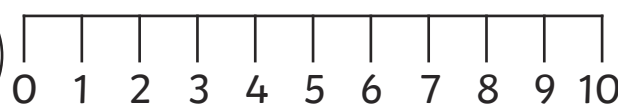
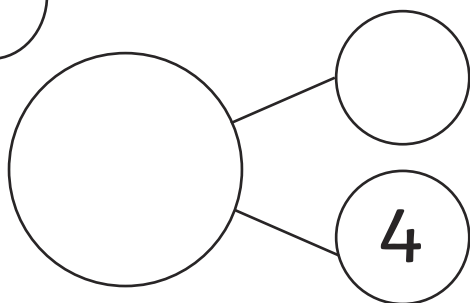
\_\_\_\_\_



$$4 + \square = 8$$

Hari had 4 lollies and bought some more. Now he has 8. How many extra lollies did he buy?

\_\_\_\_\_

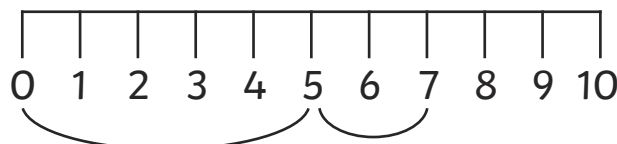
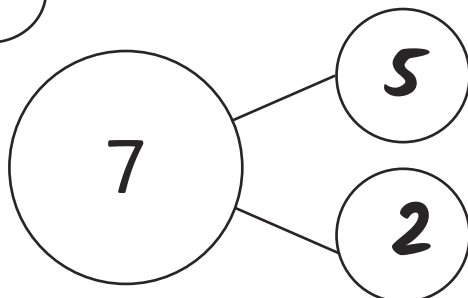




# Theo Thinks **Answers**

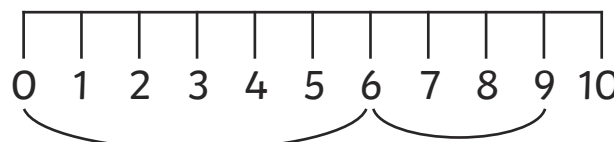
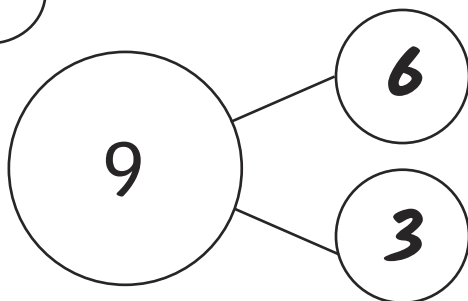
$$\boxed{2} + 5 = 7$$

Ben had some stamps. Gran gave him 5 more and now he has 7.  
How many did he start with?  
*He had 2 to start with.*



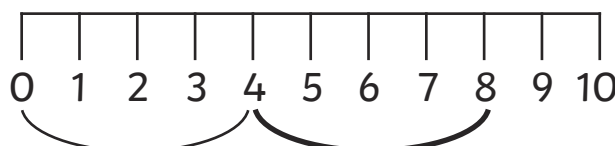
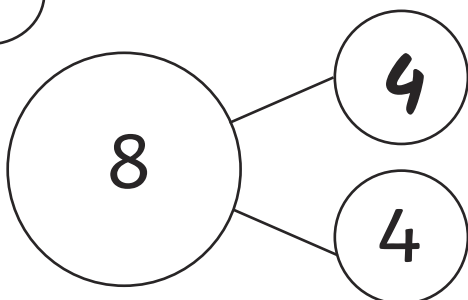
$$6 + \boxed{3} = 9$$

Alfie had £6. He saved some more and now has £9. How much extra has he saved?  
*He has saved another £3.*



$$4 + \boxed{4} = 8$$

Hari had 4 lollies and bought some more. Now he has 8. How many extra lollies did he buy?  
*He bought 4 extra lollies.*



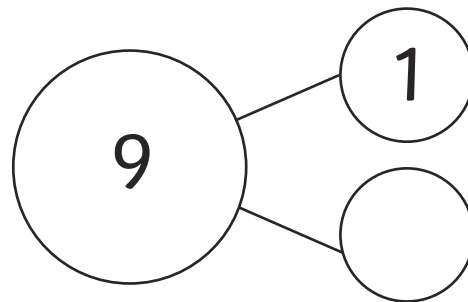
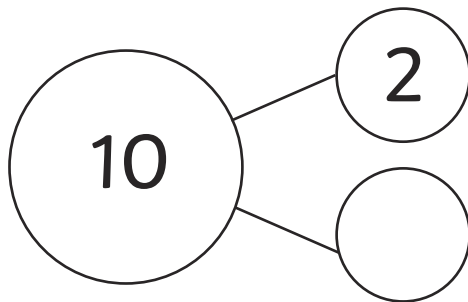
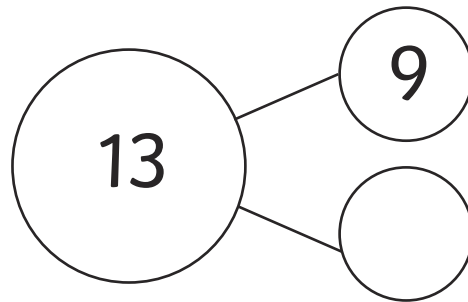
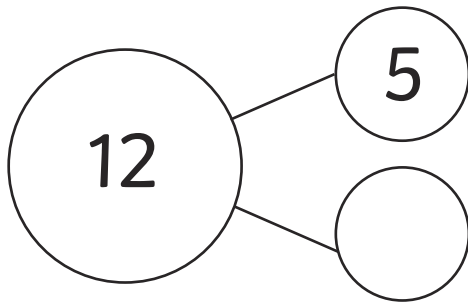


# Theo Thinks

I can find gaps in addition sentences.



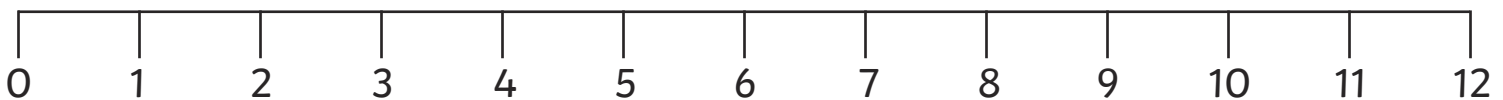
Fill in the gaps in the part-whole diagrams. Use these to help you solve the missing number puzzles. Draw jumps on the number lines to show your thinking.



Maya buys a comic. She spends £7 on football cards. She spends £12 altogether. How much did the comic cost?

$$\square + \square = \square$$

comic + football cards = total spent



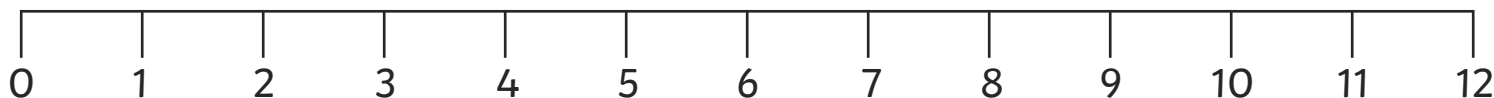


# Theo Thinks

Jin picks 8 flowers then he picks some more. He has 9 flowers in the vase altogether. How many more flowers did he pick?

$$\boxed{\phantom{00}} + \boxed{\phantom{00}} = \boxed{\phantom{00}}$$

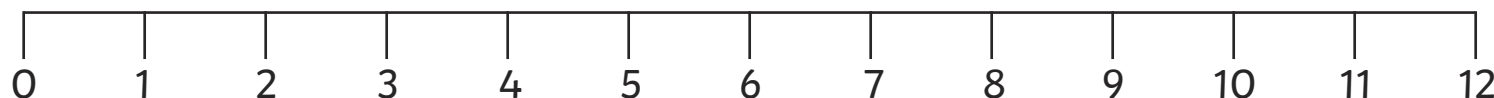
picked flowers + extra flowers = total flowers



Freya has £2. She is given some more and now has £10.  
How much more is she given?

$$\boxed{\phantom{00}} + \boxed{\phantom{00}} = \boxed{\phantom{00}}$$

Freya's money + extra money = total money



$$9 + \boxed{\phantom{00}} = 13$$

Can you draw a picture and write a story for this sentence?

A large empty rectangular box for drawing a picture and writing a story.

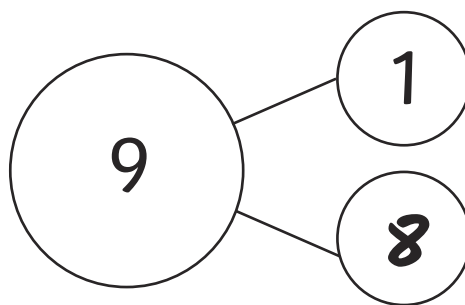
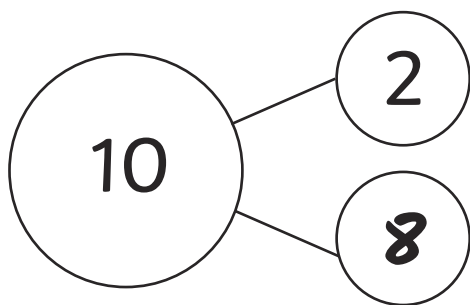
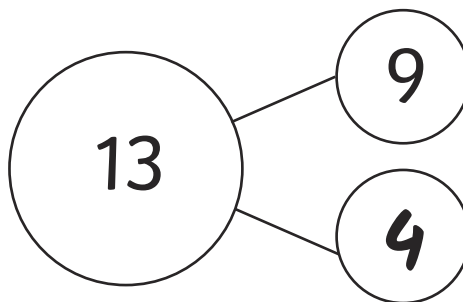
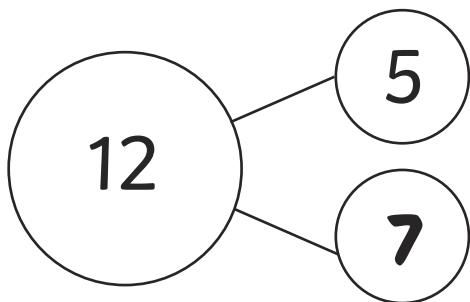
---

---



# Theo Thinks **Answers**

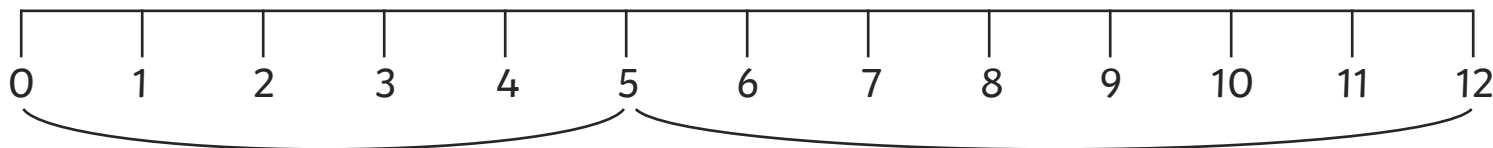
Fill in the gaps in the part-whole diagrams. Use these to help you solve the missing number puzzles. Draw jumps on the number lines to show your thinking.



Maya buys a comic. She spends £7 on football cards. She spends £12 altogether. How much did the comic cost?

$$\boxed{\pounds 5} + \boxed{\pounds 7} = \boxed{\pounds 12}$$

comic + football cards = total spent



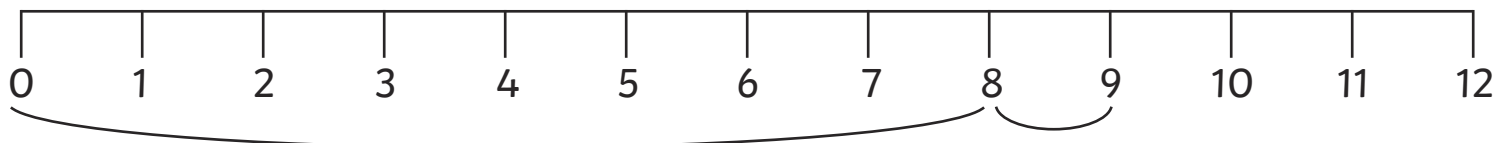


# Theo Thinks Answers

Jin picks 8 flowers then he picks some more. He has 9 flowers in the vase altogether. How many more flowers did he pick?

$$\boxed{8} + \boxed{1} = \boxed{9}$$

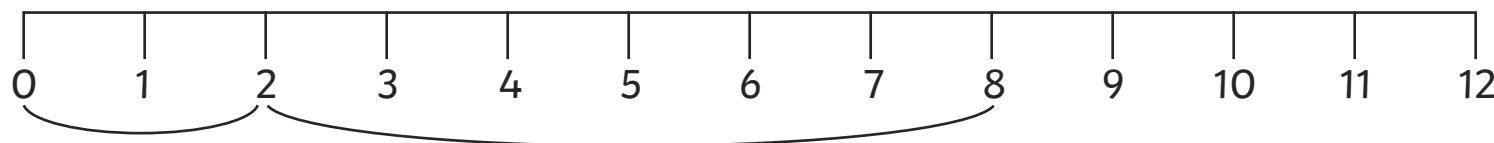
picked flowers + extra flowers = total flowers



Freya has £2. She is given some more and now has £10. How much more is she given?

$$\boxed{£2} + \boxed{£8} = \boxed{£10}$$

Freya's money + extra money = total money



$$9 + \boxed{4} = 13$$

Can you draw a picture and write a story for this sentence?  
*Accept any picture and story that makes sense.*

---

---



# Theo Thinks

I can find gaps in addition sentences.



Fill in the gaps in the information.

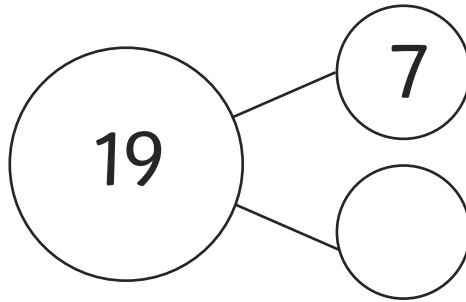
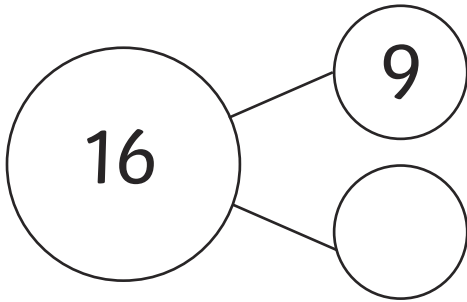
$+ 5 = 11$

$4 +$

$= 9$

$13 +$

$= 18$



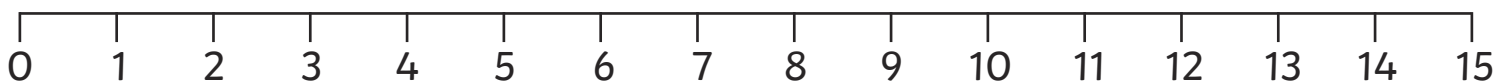
15	
7	

16	
7	

17	
7	

Can you solve the missing number puzzles below? Draw a picture, write a number sentence and fill in the number line for each one.

Jack had 5 magic beans and then found some more. He now has 14. How many magic beans did he find?

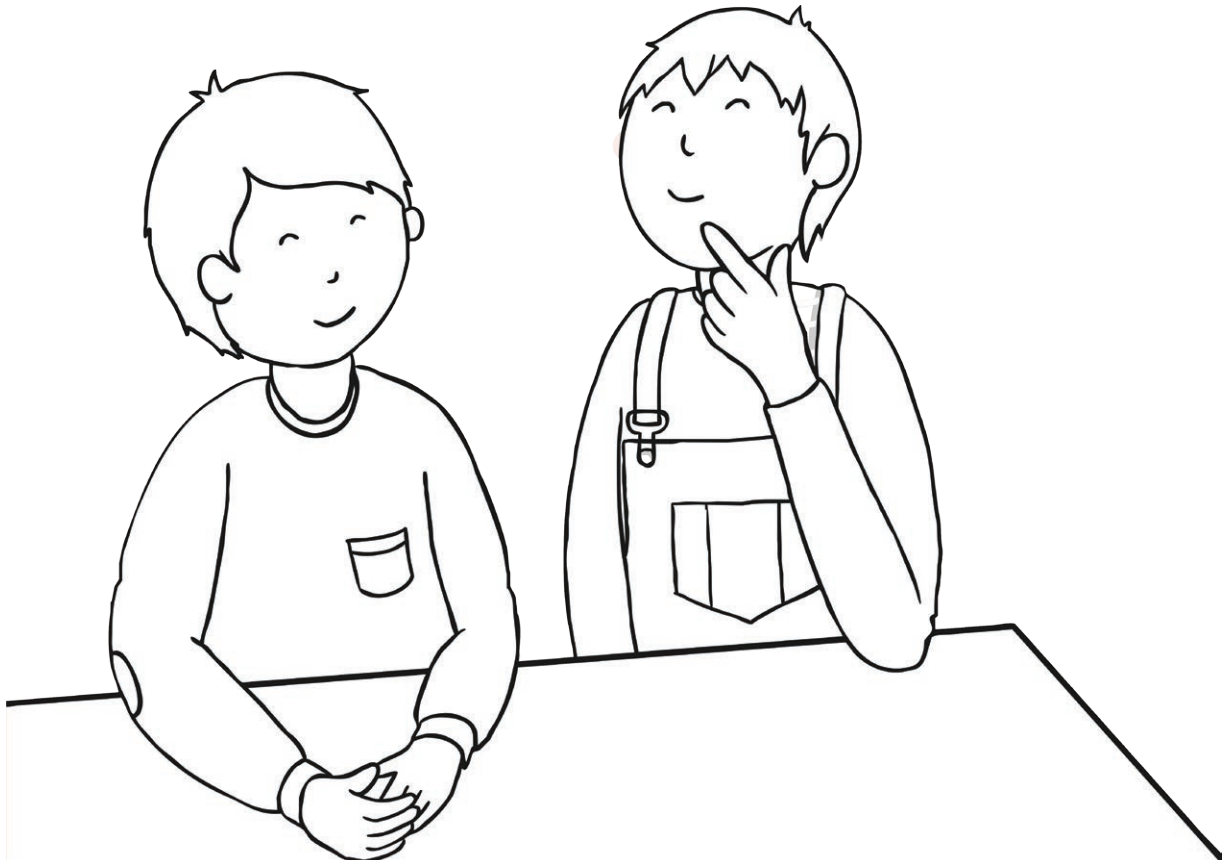
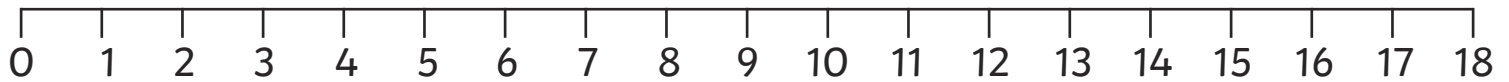






# Theo Thinks

Pete Rabbit ate some of the farmer's carrots then picked 8 more to take home. Altogether he stole 17 carrots. How many carrots did he eat?





# Theo Thinks Answers

I can find gaps in addition sentences.

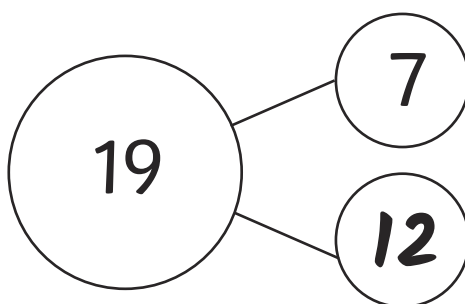
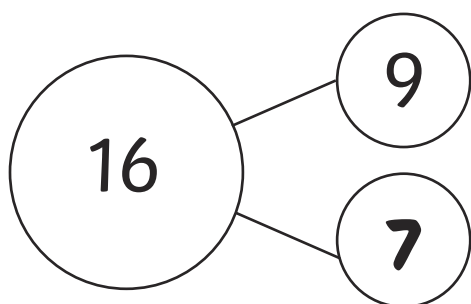


Fill in the gaps in the information.

$$\boxed{6} + 5 = 11$$

$$4 + \boxed{5} = 9$$

$$13 + \boxed{5} = 18$$



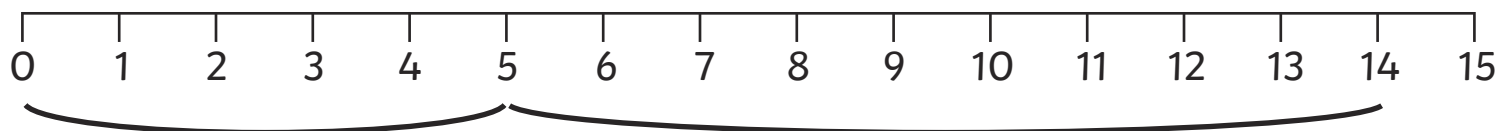
15	
7	8

16	
7	9

17	
7	10

Can you solve the missing number puzzles below? Draw a picture, write a number sentence and fill in the number line for each one.

Jack had 5 magic beans and then found some more. He now has 14. How many magic beans did he find?  $5 + 9 = 14$



Pete Rabbit ate some of the farmer's carrots then picked 8 more to take home. Altogether he stole 17 carrots. How many carrots did he eat?  $9 + 8 = 17$

