

The background of the slide features a stylized illustration of the Tower Bridge in London. The bridge's two massive stone towers are visible, with the bridge deck and its suspension cables extending across the frame. A large Union Jack flag is positioned on the right side, appearing to fly from the bridge. The sky is a clear blue with some light clouds. A dark blue horizontal band across the middle of the image contains the title text.

The UK

Countries and Cities

twinkl

Aim

- I can name and locate the countries and cities of the UK.
- I can use the eight compass points to describe the location of the countries and cities of the UK.

Success Criteria

- I can locate the countries and cities of the UK.
- I can name and label the capital cities of the countries of the UK.
- I can label key cities in the UK on a map.
- I can use the eight compass points to describe a location on the map.
- I can use a compass direction to find a location on the map.
- I can use the eight compass points to describe a location relative to another place.

Where is the UK?



Can you spot the UK on each of these maps?



Where is the UK?



Can you spot the UK on each of these maps?



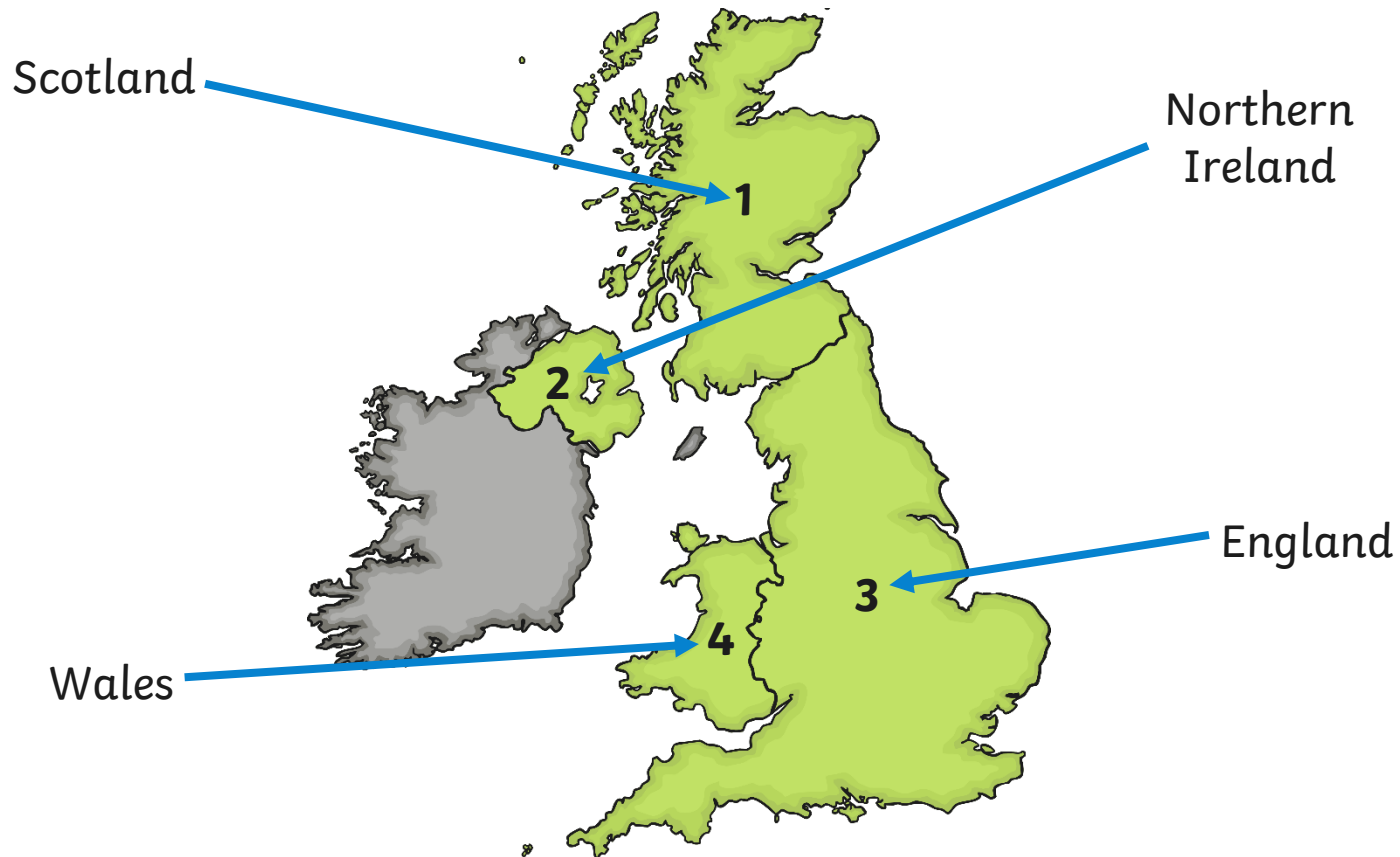
Where is the UK?



Can you spot the UK on each of these maps?



Which Countries Make Up the UK?



Which Countries Make Up the UK?



The UK is short for:

The United Kingdom of Great Britain and Northern Ireland

Which countries do you think make up Great Britain?

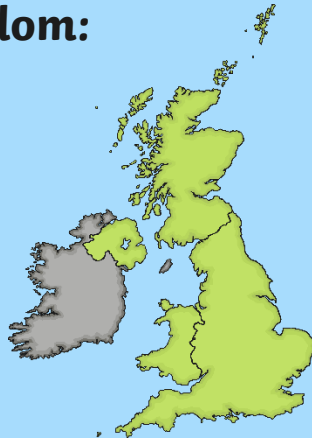
The United Kingdom:

England

Scotland

Wales

Northern Ireland

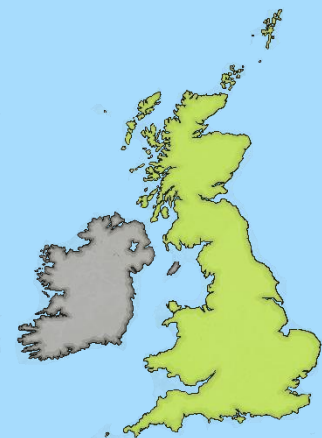


Great Britain:

England

Scotland

Wales



Sorting the Facts



England

Northern
Ireland

Scotland

Wales



Sorting the Facts



Can you find the place each city is located on this map?
Look at a map on the UK in your atlas to help you.

London

Belfast

Edinburgh


Cardiff



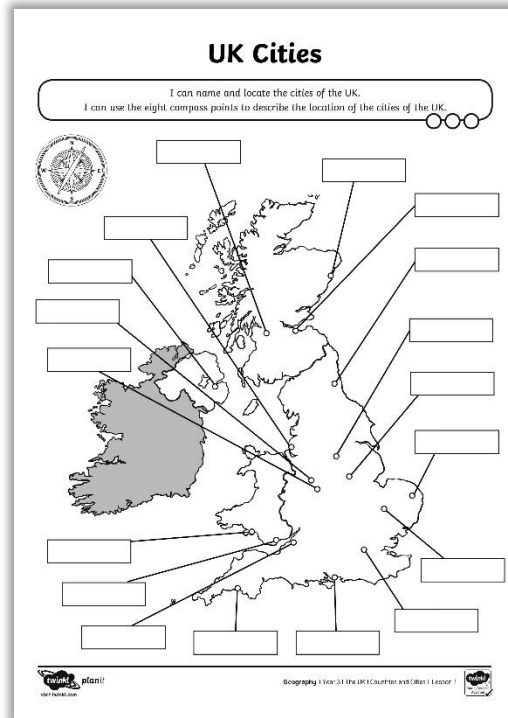
Which city is being
shown here?

Sheffield

Cities in the UK




Use your atlases to find out the names of the cities shown on your map.



Extra Challenge: Can you find the town you live in and label it on the map?

Where is That?



How could we describe the location of some of the cities?

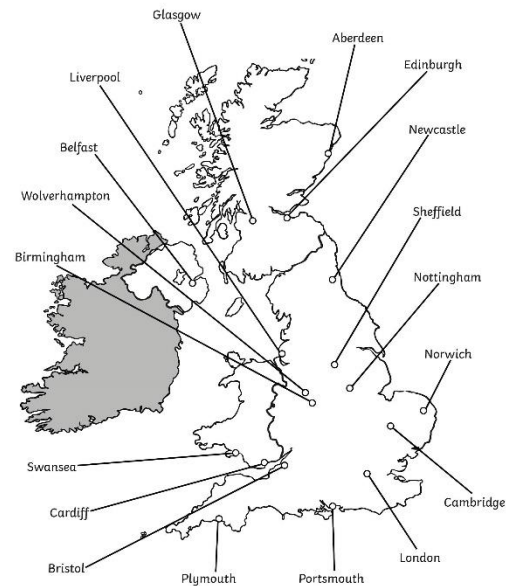
?

I travel north from Bristol.
Where do I arrive?


?

Aberdeen is in which
direction from Edinburgh?

UK Cities Answers



Which Way?



Use your UK Cities map to help you describe the position of different places.



Which Way in the UK?

I can name and locate the cities of the UK.

Which direction would you need to travel in if you made each of these journeys?

From	To	Direction
Belfast	Newcastle	
Sheffield	Portsmouth	
London	Portsmouth	
Edinburgh	Newcastle	
Nottingham	Liverpool	
Cardiff	Sheffield	
Belfast	London	
Nottingham	Bristol	
Norwich	Edinburgh	
Liverpool	Newcastle	

Word Bank

east north
south south-west
north-west
south-east west
north-east



in the UK?

the cities of the UK.

followed these directions?

	To

e UK?

UK.

se directions?

	To